



# M.R. Citi Public School



Class: **V**

## "Summer: A time to recharge, rediscover, and rise high "

Dear Parents,

Your child is entering a crucial stage of self-discovery, discipline, and academic growth. **Summer holidays offer a golden chance to shape not just their minds** but also their habits. Here are some Parenting Tips to make this journey rewarding:

Kindly note that the **summer vacation** for your ward will be from **30<sup>th</sup> May 2025 to 2<sup>nd</sup> July 2025**. The school will **reopen on 3rd July 2025** at the usual time.

### Parenting Tips

1. Talk regularly with your child—ask open-ended questions about their day.
2. Help them plan a daily routine balancing study, screen, and rest.
3. Be available emotionally—adolescents need calm support, not judgment.
4. Encourage self-learning—guide them to find answers, not give them directly.
5. Monitor social media and screen time without invading privacy.
6. Let them fail and learn—mistakes are lessons, not labels.
7. Appreciate effort more than results—this builds inner confidence.
8. Involve them in home management—budgeting, cooking, or organizing.
9. Model discipline and reading—your actions teach louder than words.
10. Promote gratitude and humility through real-life stories.
11. Celebrate small wins—be it fitness, projects, or learning a new skill.
12. Discuss real-life decisions—current events, career paths, etc.
13. Reinforce values of respect, kindness, and time management.
14. Support their individuality—not all children are the same.
15. Maintain open communication with teachers.

### Dear Students,

Your future is built by how you use your time today. This summer, relax, reflect, and grow stronger in mind, body, and spirit. Follow these tips to make your holidays meaningful:

### Student Tips

1. Design your daily schedule—include 2–3 hours of focused study.
2. Revise key topics of each subject—use mind maps or flashcards.
3. Read at least 2 good books—fiction, biographies, or self-help.
4. Write a daily diary or blog to improve expression and thinking.
5. Practice meditation or yoga—it improves focus and calmness.
6. Limit phone/gaming time—use screen for learning, not addiction.
7. Learn a new skill—coding, cooking, creative writing, or music.
8. Help around the house—teamwork begins at home.
9. Watch educational documentaries or TED Talks weekly.
10. Maintain a fitness routine—walk, skip, dance, or any sport.
11. Spend time in nature—disconnect to reconnect.
12. Set SMART goals (Specific, Measurable, Achievable, Relevant, Time-bound).
13. Practice mock tests or Olympiad papers for self-evaluation.
14. Sleep 7–8 hours and stay hydrated—health fuels success.
15. Reflect weekly—what did I learn, how did I grow, what will I improve?

"This summer, don't just pass the time—

Use it to pass your limits and surprise yourself."

Wishing you a joyful, productive and self-transforming break!

With Best Wishes,

Principal

HAPPY  
HOLIDAYS





# M.R. Citi Public School

## ENGLISH

**Instruction to be followed: -**

- i) Assignment should be done on sheets.
- ii) Neatness should be taken care.

### Section A

#### 1. Read the passage carefully

Ants are insects that we find everywhere. They may be in your home, under your school desk, in the bathroom or in the grass during a picnic. There are more than 12,000 types of ants all around the world.

In a colony there are three types of ants. These are the queen, the males and the female workers. A colony can also have more than one queen. The male ants and the queen both have wings, but workers don't. Soldier ants protect the queen ant and the colony. They also collect food and take care of the colony.

The job of the queen ant is to lay eggs for the rest of her life. Some queen ants can live up to several years and have million babies! When the queen of the ant colony dies, the colony does not survive for long.

Ants don't have ears; they listen to the vibrations through their little feet. Ants breathe through tiny holes in their entire body because they don't have lungs like us human beings. When ants are looking for food, they leave chemical trails so that they know where all they have already been.

Did you know that an ant can lift 20 times its own weight? This means that if a second-grade student was an ant, they would be able to pick up a car!

#### 1. On the basis of your reading of the passage fill in the following blanks: -

- i) We can find ants \_\_\_\_.
- ii) There are more than \_\_\_\_ types of ants.
- iii) Soldier ants protect the \_\_\_\_ and the \_\_\_\_.
- iv) The job of the queen ant is \_\_\_\_.
- v) An ant can lift \_\_\_\_ times its own weight.

#### 2. Answer the following questions from the passage.

- i) How do the ants breathe?
- ii) How do ants hear without any ears?

#### 2. Read the passage carefully.

Walking is a pleasure. When we are in a vehicle, our attention is fixed on the road. There is no time to spare for the things on the either side of the road. A walker can, however, enjoy the sights on either side. If he so likes, he can change his speed. He can walk slowly when there is much beauty around. He can go fast when he wants his walking to be an exercise for his limbs as it regulates our blood circulation.





# M.R. Citi Public School

Walking also gives us a feeling of freshness as well. However, no young person should walk thinking that it is an exercise. It will kill all the pleasure. Moreover, there are many other exercises that are good for health. Walking should be made a habit for enjoyment. One should feel relaxed and not tired after a good walk. We should walk only when the weather is fine. We should avoid walking when it is hot or smoggy.

## 1. On the basis of reading fill in the following blanks with the correct word from the passage

- Walking is a \_\_\_\_\_
- When we are in a \_\_\_, our attention is fixed on the road.
- Walking should be made a \_\_\_ for enjoyment.
- He can walk \_\_\_ when there is much \_\_\_\_\_ around.

## 2. Write True or False against each of the following statements:

- Walking is not a good exercise for our limbs. (True / False)
- We should avoid walking when the weather is hot. (True / False)

## 3. Choose a word from the passage which has the same meaning as 'foggy'

## 3. Read the poem carefully

How poisonous is the smoke!

It is harmful for the insects, human beings and trees,

The earth is crying for losing the population and greenery,

(The diseases like diphtheria, cholera and asthma are increasing)

How poisonous is the smoke!

Because of plants dying we won't get food, and balance in nature also gets disturbed, and we will also die;

How poisonous is the smoke!

## 1. Taking information from the above poem, complete the following summary by writing one suitable word in each blank.

The smoke is very (a) \_\_\_\_\_. It harms human beings, trees and (b) \_\_\_\_\_. For losing the population and the greenery the earth is (c) \_\_\_\_\_. Because of the smoke, plants are dying; so, we will not get any (d) \_\_\_\_\_.

## 2. Answer the following questions

- Name any one disease mentioned in the poem.
- Write the synonym of 'dangerous' from the poem.

## Section B

4. You are Priya. Today, while your brother was out, you received a phone call from Anita, a classmate of his. The conversation went as follows:





# M.R. Citi Public School

Anita: Hi, is this 9876543210?

Priya: Yes, this is Priya speaking. How can I help you?

Anita: Hi Priya! I'm Anita, your brother's classmate.

Priya: Oh, hello Anita! He's not at home right now. Can I take a message?

Anita: Yes, please tell him to bring the project files we worked on together. We need to submit them tomorrow.

Priya: Sure, I'll let him know as soon as he gets back.

5. Write a short paragraph on "A Rainy Day".

6. You are Seema, a student of class V – A. You have lost a library book somewhere in the school. Write a notice in about 50 words request the finder to return it to you, offering a good reward / treat.

## Section – C

### 7. Fill in the blanks with suitable

#### Nouns

1. A \_\_\_\_\_ of bees attacked the boy.
2. Tom brought \_\_\_\_\_ **packet of lays** for the trip.
3. A \_\_\_\_\_ of elephant is marching through the jungle.
4. \_\_\_\_\_ is the capital of West Bengal
5. \_\_\_\_\_ is good for health.
6. Tenali Raman was famous for his \_\_\_\_\_.
7. Our \_\_\_\_\_ will grow stronger with time.
8. Anant made the project with the help of his friend \_\_\_\_\_.
9. The \_\_\_\_\_ is the newspaper circulated all over the town.
10. A large \_\_\_\_\_ of ants made their way over the ant hill.

### 8. Use Capital letters and punctuations.

1. river yamuna flows through agra
2. Eiffel tower is the most famous monument in france
3. my brother is a singer
4. where have you been all this while
5. you look hot are you ill
6. my best friend and his family are moving to Chennai
7. you don't look happy to see me do you shouldn't have done this to john
8. there is a large rain forest in south America

### 9. Write the forms of verb of the following.

- |           |            |            |          |          |            |
|-----------|------------|------------|----------|----------|------------|
| i) draw   | ii) marry  | iii) Weep  | iv) Fly  | v) Drive | vi) Arrive |
| ii) Rise  | vii) Say   | viii) Feel | ix) Cost | x) Cut   | xi) Know   |
| xii) Ride | xiii) Sink | xiv) Sit   |          |          |            |







# M.R. Citi Public School



## Section – D

### 10. Answer the following questions.

L -1 & L-2

1. How many seconds did Authors father take to button up his shirt?
2. What did the Whistle mean?
3. On what occasions did author's father whistle?
4. How did the whistle ceremony prove useful?
5. Whom did the daffodils out – do in their dance?
6. Name the poet of the poem 'If I Were Lord of Tartary.
7. Where was Oliver born?
8. Who was Mrs. Mann?
9. Who was Oliver?
- 10 Who locked Oliver in a coal cellar?
- 11.What work was given to Oliver to earn money?
12. How many pounds did board members offered to get rid of Oliver?

## PUNJABI

ਇਹ ਕੰਮ ਸੁੰਦਰ ਤੇ ਸਾਫ਼ ਲਿਖਾਈ ਵਿੱਚ A4 ਸ਼ੀਟ ਤੇ ਕਰੋ।

ਪਾਠ ਪੁਸਤਕ ਪਾਠ 1. ਸਾਡਾ ਦੇਸ਼ ਮਹਾਨ, ਪਾਠ 2. ਆਲਣਿਆਂ ਦੀ ਰਾਖੀ, ਪਾਠ 3. ਮੇਰੀ ਪਿਆਰੀ ਮਾਂ

### 1. ਹੇਠ ਲਿਖੇ ਸ਼ਬਦਾਂ ਦੇ ਅਰਥ ਲਿਖੋ:

- |        |              |              |           |          |
|--------|--------------|--------------|-----------|----------|
| 1. ਨਸਲ | 2. ਹਮਜ਼ੇਲੀ   | 3. ਹਮਸਾਏ     | 4. ਆਲ੍ਹਣੇ | 5. ਸਕੀਮ  |
| 6. ਆਮਦ | 7. ਬਾਂਹ ਫੜਨਾ | 8. ਰਾਹ ਤੱਕਣਾ | 9. ਗਰਾਂ   | 10. ਚੁਰੀ |

### 2. ਹੇਠ ਲਿਖੇ ਸ਼ਬਦਾਂ ਨੂੰ ਵਾਕਾਂ ਵਿੱਚ ਵਰਤੋ

- |          |         |           |        |         |
|----------|---------|-----------|--------|---------|
| 1. ਇਨਸਾਨ | 2. ਜੰਗਲ | 3. ਕੁਹਾੜੀ | 4. ਚੰਨ | 5. ਗੋਦੀ |
|----------|---------|-----------|--------|---------|

### 3. ਹੇਠ ਲਿਖੇ ਪ੍ਰਸ਼ਨਾਂ ਦੇ ਉੱਤਰ ਦਿਓ

- ਪ੍ਰਸ਼ਨ 1. ਹਰ ਸ਼ਹਿਰੀ ਦੇ ਮੂੰਹ ਤੋਂ ਕਿਹੜੇ ਲਾਲੀ ਟਪਕਦੀ ਹੈ?
- ਪ੍ਰਸ਼ਨ 2. ਭਾਰਤ ਵਾਸੀ ਇੱਕ ਦੂਜੇ ਲਈ ਕੀ ਘੋਲ ਘੁਮਾਉਂਦੇ ਹਨ?
- ਪ੍ਰਸ਼ਨ 3. ਸਾਰਾ ਜੱਗ ਕਿਸ ਤੋਂ ਉਪਜਿਆ ਹੈ?
- ਪ੍ਰਸ਼ਨ 4. ਹੈਰੀ ਦੀਆਂ ਅੱਖਾਂ ਵਿੱਚ ਰੜਕ ਕਿਉਂ ਪੈਣ ਲੱਗ ਪਈ ਸੀ?
- ਪ੍ਰਸ਼ਨ 5. ਹੈਰੀ ਦੇ ਘਰ ਦੇ ਚੜਦੇ ਪਾਸੇ ਵੱਲ ਕਿਹੜੀਆਂ ਪਹਾੜੀਆਂ ਸਨ?
- ਪ੍ਰਸ਼ਨ 6. ਹੈਰੀ ਦੇ ਮਾਮਾ ਜੀ ਕੀ ਕੰਮ ਕਰਦੇ ਸਨ?
- ਪ੍ਰਸ਼ਨ 7. “ਆਲ੍ਹਣਿਆਂ ਦੀ ਰਾਖੀ” ਕਹਾਣੀ ਦੇ ਅਨੁਸਾਰ ਭਾਗਾਂ ਵਾਲਾ ਕੌਣ ਹੁੰਦਾ ਹੈ?





# M.R. Citi Public School



- ਪ੍ਰਸ਼ਨ 8. ਕੁਦਰਤ ਦੇ ਨੇੜੇ ਰਹਿਣ ਨਾਲ ਕਿਸ ਨੂੰ ਬਲ ਮਿਲਦਾ ਹੈ?  
 ਪ੍ਰਸ਼ਨ 9. ਬੱਚੇ ਕਿਉਂ ਦੁਖੀ ਹੋਏ?  
 ਪ੍ਰਸ਼ਨ 10. ਹੈਰੀ ਨੇ ਆਲ੍ਹਣਿਆਂ ਦੀ ਰਾਖੀ ਕਿਵੇਂ ਕੀਤੀ?  
 ਪ੍ਰਸ਼ਨ 11. ਮਾਂ ਬੱਚੇ ਨਾਲ ਲਾਡ ਕਿਵੇਂ ਲਡਾਉਂਦੀ ਹੈ?  
 ਪ੍ਰਸ਼ਨ 12. ਬੱਚੇ ਦੇ ਦੁੱਖ ਵੇਲੇ ਮਾਂ ਕੀ ਕਰਦੀ ਹੈ?  
 ਪ੍ਰਸ਼ਨ 13. ਮਾਂ ਬੱਚੇ ਨੂੰ ਕੀ ਕੁੱਟ ਕੇ ਖਵਾਉਂਦੀ ਹੈ?  
 ਪ੍ਰਸ਼ਨ 14. ਕੁਦਰਤ ਦੀ ਗੋਦੀ ਦਾ ਕੀ ਮਾਣੇ?  
 ਪ੍ਰਸ਼ਨ 15. ਪੰਛੀਆਂ ਨੇ ਕਿਹੜੇ ਰੁੱਖ ਤੇ ਆਲਣੇ ਪਾਏ ਹੋਏ ਸਨ?

ਵਿਆਕਰਨ      ਪਾਠ 1 ਭਾਸ਼ਾ ਜਾ ਬੋਲੀ      ਪਾਠ 6 ਨਾਂਵ

## ਬਹੁਤ ਵਿਕਲਪੀ ਪ੍ਰਸ਼ਨ

- ਪ੍ਰਸ਼ਨ 1. ਸਾਡੀ ਰਾਜ ਭਾਸ਼ਾ ਕਿਹੜੀ ਹੈ?  
 (ੳ) ਹਿੰਦੀ      (ਅ) ਪੰਜਾਬੀ      (ੲ) ਅੰਗਰੇਜ਼ੀ
- ਪ੍ਰਸ਼ਨ 2. ਸਾਡੀ ਰਾਸ਼ਟਰੀ ਭਾਸ਼ਾ ਕਿਹੜੀ ਹੈ?  
 (ੳ) ਹਿੰਦੀ      (ਅ) ਮਰਾਠੀ      (ੲ) ਦੇਵਨਾਗਰੀ
- ਪ੍ਰਸ਼ਨ 3. ਮਾਤ ਭਾਸ਼ਾ ਕਿਹੜੀ ਹੁੰਦੀ ਹੈ?  
 (ੳ) ਸਕੂਲ ਤੋਂ ਸਿੱਖੀ ਜਾਣ ਵਾਲੀ      (ਅ) ਦੇਸਤਾਂ ਤੋਂ ਸਿੱਖੀ ਜਾਣ ਵਾਲੀ      (ੲ) ਮਾਂ ਤੋਂ ਸਿੱਖੀ ਜਾਣ ਵਾਲੀ
- ਪ੍ਰਸ਼ਨ 4. ਸਾਡੀ ਅੰਤਰਰਾਸ਼ਟਰੀ ਭਾਸ਼ਾ ਕਿਹੜੀ ਹੈ?  
 (ੳ) ਰੋਮਨ      (ਅ) ਫਾਰਸੀ      (ੲ) ਅੰਗਰੇਜ਼ੀ
- ਪ੍ਰਸ਼ਨ 5. ਆਮ ਨਾਂਵ ਚੁਣੋ?  
 (ੳ) ਸ੍ਰੀ ਹਰਿਮੰਦਰ ਸਾਹਿਬ      (ਅ) ਮੁੰਡਾ      (ੲ) ਮਹਿੰਦਰ ਸਿੰਘ ਧੋਨੀ
- ਪ੍ਰਸ਼ਨ 6. ਇਕੱਠ ਵਾਚਕ ਨਾਂਵ ਚੁਣੋ?  
 (ੳ) ਪਰਿਵਾਰ, ਜਮਾਤ      (ਅ) ਮੁੰਡਾ, ਕੁੜੀ      (ੲ) ਫੁੱਲ, ਪੱਤੇ
- ਪ੍ਰਸ਼ਨ 7. ਖਾਸ ਨਾਂਵ ਚੁਣੋ?  
 (ੳ) ਟਾਹਣੀ      (ਅ) ਰੁੱਖ      (ੲ) ਸ੍ਰੀ ਗੁਰੂ ਨਾਨਕ ਦੇਵ ਜੀ
- ਪ੍ਰਸ਼ਨ 8. ਭਾਵਵਾਚਕ ਨਾਂਵ ਚੁਣੋ?  
 (ੳ) ਕਾਪੀ      (ਅ) ਗਰੀਬੀ      (ੲ) ਪੈਨ
- ਪ੍ਰਸ਼ਨ 9. ਜਿਹੜੀਆਂ ਚੀਜ਼ਾਂ ਮਿਣੀਆਂ ਜਾਂ ਤੇਲੀਆਂ ਜਾ ਸਕਦੀਆਂ ਹਨ ਉਹਨਾਂ ਨੂੰ ਕਿਹੜਾ ਨਾਂਵ ਕਿਹਾ ਜਾਂਦਾ ਹੈ?  
 (ੳ) ਆਮ ਨਾਂਵ      (ਅ) ਵਸਤੂਵਾਚਕ ਨਾਂਵ      (ੲ) ਖਾਸ ਨਾਂਵ
- ਪ੍ਰਸ਼ਨ 10. ਆਮ ਬੋਲ ਚਾਲ ਦੀ ਭਾਸ਼ਾ ਨੂੰ ਹੋਰ ਕੀ ਕਿਹਾ ਜਾਂਦਾ ਹੈ?  
 (ੳ) ਲਿਖਤੀ ਭਾਸ਼ਾ      (ਅ) ਮੌਖਿਕ ਭਾਸ਼ਾ      (ੲ) ਟਕਸਾਲੀ ਭਾਸ਼ਾ





# M.R. Citi Public School

## 2. ਹੇਠ ਲਿਖੇ ਪ੍ਰਸ਼ਨਾਂ ਦੇ ਉੱਤਰ ਦਿਓ :-

- ਪ੍ਰਸ਼ਨ 1. ਭਾਸ਼ਾ ਦੀ ਪਰਿਭਾਸ਼ਾ ਦਿਓ?
- ਪ੍ਰਸ਼ਨ 2. ਭਾਸ਼ਾ ਦੀਆਂ ਕਿੰਨੀਆਂ ਕਿਸਮਾਂ ਹਨ? ਉਹਨਾਂ ਦੇ ਨਾਂ ਲਿਖੋ।
- ਪ੍ਰਸ਼ਨ 3. ਵਿਆਕਰਨ ਦੇ ਕਿੰਨੇ ਅੰਗ ਹਨ? ਉਹਨਾਂ ਦੇ ਨਾਂ ਲਿਖੋ।
- ਪ੍ਰਸ਼ਨ 4. ਨਾਵ ਦੀ ਪਰਿਭਾਸ਼ਾ ਦਿਓ।
- ਪ੍ਰਸ਼ਨ 5. ਨਾਵ ਦੀਆਂ ਕਿੰਨੀਆਂ ਕਿਸਮਾਂ ਹਨ? ਉਹਨਾਂ ਦੇ ਨਾਂ ਲਿਖੋ।

## 3. ਹੇਠ ਲਿਖੇ ਵਿਸ਼ੇ ਤੇ ਲੇਖ ਲਿਖੋ

- ✿ ਟੈਲੀਵਿਜ਼ਨ ਦੇ ਲਾਭ ਤੇ ਹਾਨੀਆਂ
- ✿ ਦੀਵਾਲੀ
- ✿ ਚੰਗੀ ਸੰਗਤ
- ✿ ਸਮੇਂ ਦੀ ਕਦਰ
- ✿ ਕੰਪਿਊਟਰ ਦੇ ਲਾਭ ਤੇ ਹਾਨੀਆਂ

## 4. ਹੇਠ ਲਿਖਿਆਂ ਵਿੱਚੋਂ ਪੱਤਰ ਤੇ ਬਿਨੇ ਪੱਤਰ ਲਿਖੋ

- ✿ ਆਪਣੇ ਸਕੂਲ ਦੇ ਮੁੱਖ ਅਧਿਆਪਕਾਂ ਨੂੰ ਸਕੂਲ ਛੱਡਣ ਦਾ ਸਰਟੀਫਿਕੇਟ ਲੈਣ ਲਈ ਬਿਨੇ ਪੱਤਰ ਲਿਖੋ।
- ✿ ਆਪਣੇ ਮਿੱਤਰ ਜਾ ਸਹੇਲੀ ਨੂੰ ਪਾਸ ਹੋਣ ਤੇ ਵਧਾਈ ਪੱਤਰ ਲਿਖੋ।

## HINDI

ਧਰੁ ਕਾਰੁ ਸੁੰਦਰ ਔਰ ਸਾਫੁ ਦਿਖਾਓ ਮੇਂ A4 ਸ਼ੀਟ ਪਰ ਕਰੋਂ।

### I. ਰਿਕੁਤ ਸੁਧਾਨ ਖਰੋ:

1. ਹਿੰਦੀ ਵਰੁਨਮਾਲਾ ਮੇਂ ਕੁਲ ..... ਸੁਵਰ ਹੇਂ।
2. ਸੰਯੁਕੁਤ ਵੁਂਯਨੋਂ ਕੀ ਸੰਖੁਯਾ ..... ਹੈ।
3. ਖਾਸ਼ਾ ਕੇ ..... ਰੂਪ ਹੇਂ।
4. ਹਿੰਦੀ ਖਾਸ਼ਾ ਕੀ ਲਿਪਿ ..... ਹੈ।
5. ਮਨੁਸ਼ੁ ਅਪਨੇ ਮਨ ਕੇ ਵਿਚਾਰ ..... ਦੁਵਾਰਾ ਪਰਕਟ ਕਰੁਤਾ ਹੈ।
6. ਵੁਯਾਕਰਨ ਕੇ ..... ਵਿਖਾਗ ਹੇਂ।
7. ਖਾਸ਼ਾ ਕੇ ..... ਕੌਸ਼ਲ ਹੈ।
8. ਮਨੁਸ਼ੁ ਅਪਨੇ ਮਨ ਕੇ ਵਿਚਾਰ ..... ਦੁਵਾਰਾ ਪਰਕਟ ਕਰੁਤਾ ਹੈ।
9. ਅਂਗਰੇਜ਼ੀ ਖਾਸ਼ਾ ਕੀ ਲਿਪਿ ..... ਹੈ।
10. ਵਾਕੁਯ ਵਿਚਾਰ ..... ਕਾ ਵਿਖਾਗ ਹੈ।

### II. ਨਿਮੁਲਿਖਿਤ ਪੁਰੁਸ਼ੋਂ ਕੇ ਉਤੁਰ ਦੀਯੋ :

1. ਖਾਸ਼ਾ ਕੀ ਪਰਿਖਾਸ਼ਾ ਲਿਖੋ।
2. ਖਾਸ਼ਾ ਕੇ ਕਿਤਨੇ ਰੂਪ ਹੇਂ? ਖਾਸ਼ਾ ਕੇ ਰੂਪੋਂ ਕੇ ਨਾਮ ਲਿਖੋ।
3. ਵੁਯਾਕਰਨ ਕਿਸੇ ਕਹੁਤੇ ਹੇਂ ?
4. ਖਾਰਤੀਯ ਸੰਵਿਧਾਨ ਮੇਂ ਕਿਤਨੀ ਖਾਸ਼ਾਔਂ ਕੋ ਮਾਨੁਯਤਾ ਪੁਰਾਪੁਤ ਹੈ?
5. ਸੰਯੋ ਕਿਸੇ ਕਹੁਤੇ ਹੇਂ?





# M.R. Citi Public School

6. सर्वनाम की परिभाषा तथा सर्वनाम के भेदों के नाम लिखो।
7. लिंग किसे कहते हैं? लिंग के भेदों के नाम लिखो।
8. काल किसे कहते हैं? काल के भेदों के नाम लिखो।
9. विलोम शब्द की परिभाषा लिखो।
10. भाषा के कितने कौशल हैं? नाम लिखो।

## III. बहुविकल्पीय प्रश्न :

### 1. काल का भेद पहचानो

1. मेरे पिताजी खाना खा रहे थे।

क. वर्तमान काल

ख. भूतकाल

ग. भविष्य काल

2. बच्चे कक्षा के बाहर खड़े हैं।

क. वर्तमान काल

ख. भूतकाल

ग. भविष्य काल

3. सर्वनाम के कितने भेद हैं?

क. पाँच

ख. छह

ग. चार

4. संस्कृत भाषा की लिपि कौन सी है ?

क. रोमन

ख. गुरुमुखी

ग. देवनागरी

5. भाषा के कितने कौशल हैं?

क. दो

ख. चार

ग. पाँच

6. हिंदी भाषा की लिपि कौन सी है?

क. देवनागरी

ख. गुरुमुखी

ग. रोमन

7. भारतीय संविधान में कितनी भाषाओं को मान्यता प्राप्त है?

क. 25

ख. 22

ग. 20

8. शब्द विचार किसका विभाग है?

क. भाषा का

ख. लिपि का

ग. व्याकरण का

9. निम्न में से संयुक्त व्यंजन कौन सा है?

क. छ

ख. क्ष

ग. य

10. हिंदी वर्णमाला में कुल वर्ण कितने हैं?

क. 52

ख. 34

ग. 28

### 4. लिंग बदलो 1-20

### 5. विपरीतार्थक शब्द : 1-20

### 6. निम्नलिखित विषयों पर अनुच्छेद लिखिए :

वर्षा का एक दिन ,

बैसाखी का त्यौहार,


वृक्षों के लाभ







# M.R. Citi Public School



## 7. प्रार्थना पत्र :

- क. अपने स्कूल के प्रधानाचार्य को जरूरी काम की छुट्टी लेने के लिए प्रार्थना पत्र लिखो।  
ख. अपने स्कूल के प्रधानाचार्य को कक्षा में देरी से आने पर कारण बताते हुए अनुमति के लिए प्रार्थना पत्र लिखो।

## MATHS

### Do Assignment on Sheets

#### I. One-mark questions:

##### Assignment of chapter 1,2 and 3.

- Which of the following roman numeral can never be repeated?  
(a) I (b) X (c) V
- Numeral for sixty thousand two hundred is:  
(a) 60,002 (b) 60,200 (c) 16,200 (d) 16,002
- 1482 round off nearest hundred is:  
(a) 1480 (b) 1482 (c) 1400 (d) 100
- Compare:  $6152 + 3854 = \text{-----} 9000$   
(a)  $<$  (b)  $>$  (c)  $=$
- How many zeroes are there in one lakh?  
(a) 4 (b) 7 (c) 6 (d) 5
- MMC = -----  
(a) 2001 (b) 2000 (c) 2100 (d) 250
- XVI =  $10 + \text{-----} = 16$
- Place value of 3 in 86,31,009:  
(a) 300000 (b) 3000 (c) 30 (d) 30000
- Round off 1582 to the nearest ten is:  
(a) 1590 (b) 1580 (c) 15800 (d) None
- Assertion: The Roman Numeral for 24 is XXIV.  
Reason: In Roman numerals 2 times X represents  $10 + 10 = 20$  and IV represents 4. So,  $(10 + 10 + 4) = 24$ .

- (a) Both assertion and reason are true, and the reason correctly explains the assertion.  
(b) Both assertion and reason are true, but the reason does not correctly explain the answer.  
(c) Assertion is true, but reason is false.  
(d) Assertion is false, but reason is true.





# M.R. Citi Public School

11. Numeral for seven lakh fifty thousand is:

- (a) 7,50,402    (b) 7,50,004    (c) 7,05,004    (d) 7,00,504

12. Number of days in the month of February in a leap year?

- (a) XXX    (b) XXVIII    (c) XXXI    (d) XXIX

13.  $XXV = 20 + \text{-----} = 25$

14. Compare 6,42,07,292 ----- 6,42,07,392

- (a) <    (b) >    (c) =

15. How many zeroes are there in one crore?

- (a) 8    (b) 6    (c) 7    (d) 5

16. Assertion: The Roman Numeral for 14 is XIV

Reason: If Roman Numerals, X represents 10 and IV represents 4. So,  $(10+4) = 14$

- (a) Both assertion and reason are true, and the reason correctly explains the answer.  
(b) Both assertion and reason are true, but the reason does not correctly explain the answer.  
(c) Assertion is true, but reason is false.  
(d) Assertion is false, but the reason is true.

17. The product of the place values of 6 and 2 in 8,73,246

- (a). 800    (b) 600    (c) 18000

18. Dodging tables:

- (a)  $2 \times 9 = \text{-----}$     (b)  $8 \times 5 = \text{-----}$     (c)  $15 \times 6 = \text{----}$

19. Round off nearest thousand: 58839

- (a) 59000    (b) 58000    (c) 8000    (d) 5800

20.  $XXII - V = \text{-----}$

## II. Two-mark questions:

1. Write the following in expanded form:

- (a) 9,99,05,132    (b) 2,68,56,707

2. Write the following in increasing order:

44, 45, 678; 50, 78, 10, 549; 7, 94, 310; 8, 41, 20, 070.

3. Write following Roman numerals in the Hindu- Arabic system.

- (a) MM    (b) C    (c) CDVII    (d) D

4. Write the greatest 8-digit number with three Different digits.

5. Write the given numeral in Indian and international system: 78049725.

6. Round off nearest ten, hundred and Thousand: 89,78,093.





# M.R. Citi Public School

7. Write the standard form of  $5,00,00,000 + 20,00,000 + 10,000 + 8000 + 80 + 4$
8. Write the numeral for the following:
  - (a). Fifty-eight lakh six thousand five
  - (b). nine hundred eighty million two thousand Four.
9. Round off nearest lakh and Crore:  
98,07,25,167
10. Match the following:

(a). 342	1058
(b) MIX	103
(c) CIII	CCCXLII
(d) MLVIII	1009

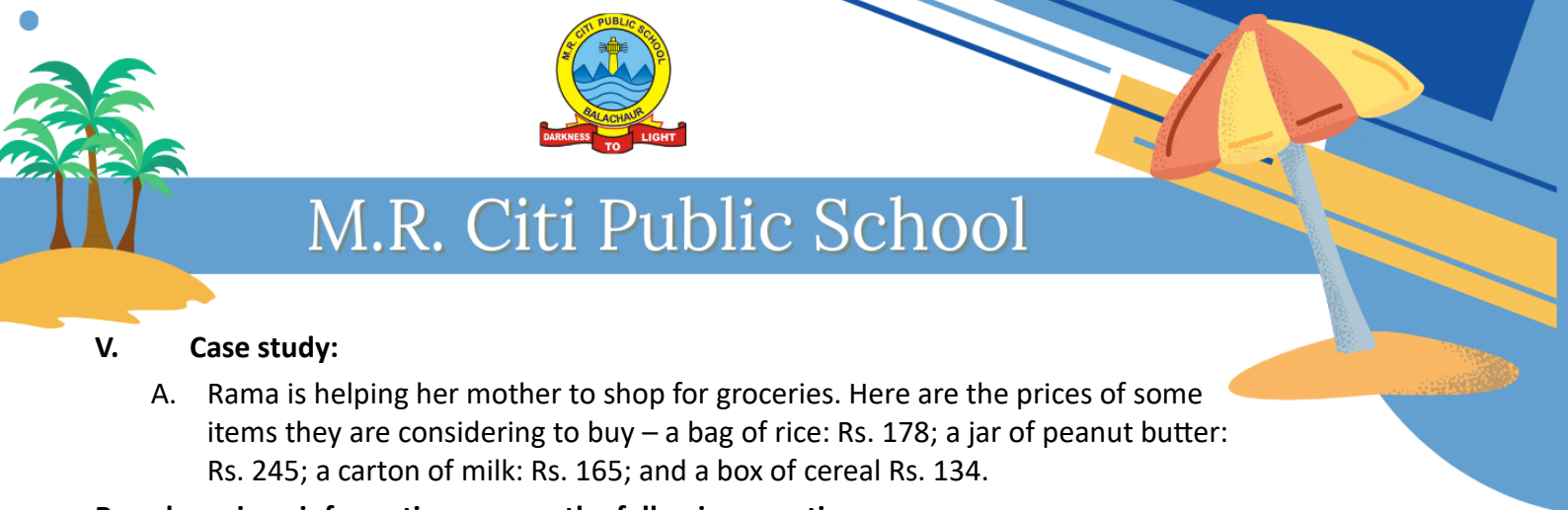
### III. Three-mark questions:

1. Counting by hundreds, write the numbers from 70,09,709 to 70,10,209.
2. Arrange the following in descending order:  
8,36,04,295; 40,34,51,276; 3,04,63,500; 99,00,32,941.
3. Write the smallest and largest 7-digit number using the digits 0,2,4,6,5,9 and 8.
4. Round off nearest tens, thousand and ten- thousand.  
(a). 3,28,433.
5. Preeti bought a cake of Rs. 450 and a banana bread for Rs. 133. Write the total amount of money spent in roman numerals.
6. Write the roman numerals for:  
(a) 64                      (b) 41                      (c) 472
7. Write the successor and predecessor of:  
88,22, 90,990.

### IV. Five-mark questions:

1. Use the digits 8,9,2,4,1,7,6,3,5.
  - (a) the largest possible number
  - (b) the smallest possible number
  - (c) Write in words to both the numbers, by using Indian system.
2.
  - (a) Write in decreasing order: XVI; XXXV; XXVII; IX; L
  - (b) Write the sum of:  $CD+XXX$
  - (c) Round off nearest hundred and crore:  
18,43,56, 001.





# M.R. Citi Public School

## V. Case study:

- A. Rama is helping her mother to shop for groceries. Here are the prices of some items they are considering to buy – a bag of rice: Rs. 178; a jar of peanut butter: Rs. 245; a carton of milk: Rs. 165; and a box of cereal Rs. 134.

### Based on given information answer the following questions:

1. Round off the following items nearest ten.
  - (a) Rice = Rs. 178
  - (b) Peanut butter = Rs. 245
  - (c) Round off the following items nearest hundred:
    - (a) Milk = Rs. 165
    - (b) cereal = Rs. 134
    - (c) Find the total cost of all the items and round off to the nearest hundred.
- B. The Toy factory has been experiencing Tremendous success in producing and selling toys.

In January – the factory sold 4,532 toys.  
In February – the factory sold 6,748 toys.  
In March – the factory sold 2,146 toys.  
In April – April marked a special Event, and the factory sold 85,000 toys

### Based on given information answer the following questions:

- (a) In which month there was maximum sale of toys.
- (b) Write the expanded form of the number of toys sold in the month of March?
- (c) Write the place value of 8 in the number of toys sold in February.
- (d) Arrange the given data in descending order.

## Assignment of chapter -4

### Section- A

#### I. One-mark questions:

1.  $7670392 + 7400287 =$ 
  - (a) 46605674
  - (b) 10665679
  - (c) 15070679
  - (d) 16006679
2.  $75839 \times 626 =$ 
  - (a) 47780153
  - (b) 47551053
  - (c) 42180153
  - (d) 47680013
3.  $719528750 - 87021248 =$ 
  - (a) 721608516
  - (b) 626107516
  - (c) 632507606
  - (d) 632507502
4. The quotient in 40 divided by 8 is:
  - (a) 6
  - (b) 8
  - (c) 5
5.  $245 \times 100 = \text{-----}$





# M.R. Citi Public School

6. The remainder in 48357 divided by 1

## II. Two-mark questions:

1. Add:  $43234678 + 54676850 + 759837$
2. Sub:  $9,21,34,852 - 2,47,92,460$
3. Multiply:  $70935 \times 36$
4. Divide: 371654 by 15
5. Multiply six thousand two hundred by twenty.

## Three-mark questions:

1. In a division sum the division sum, the divisors are 63, the quotient is 857 and the remainder is 27. What is the dividend.
2. Simplify:  $44,16,98,853 + 8,65,09,152 - 7,72,563$
3. What must be added to 70,62,369 to make it equals to eighty lakhs.
4. Estimate the difference:  
(a)  $1512803 - 926704$       (b) Estimate the quotient :4423 divided by 21.
5. Find the number of pages in a book which has 207 words on a page and contains 155250 words altogether.

## IV. Five-mark questions:

1. (a) What must 698 be multiplied by to give 846674?  
(b) Estimate the product:  $6128 \times 235$
2. A packet contains 12218 paper Clips. If a shopkeeper buys 9 such packets, what the actual and Approximated number of paper clips bought?  
(b). Estimate the sum:  $600700 + 431204$

## V. Case Study:

A. A 5th grade class is planning a Field trip to the city museum. There are 30 students in the class. They need to calculate the total cost of the trip, which includes:

- # Entry fee – Rs. 500 per student
- # Lunch – Rs 1200 per student
- # Bus transportation--- Rs.1000 per student

Answer the following question:

1. What will be the total cost of the bus transportation?
2. What is the total cost of museum entry fee for the class?
3. Find the total cost paid for the lunch for 30 students?
4. What will be the total cost of the entire trip?







# M.R. Citi Public School

## SCIENCE

### Chapter- The skeletal system

#### Fill in the blanks

1. \_\_\_\_\_ is the largest bone of human body.
2. \_\_\_\_\_ is the smallest bone present in human body.
3. The muscles of arms are example of \_\_\_\_\_ muscles.
4. Backbone is also known as \_\_\_\_\_.
5. Skull is made up of \_\_\_\_\_ bones.

#### Question / Answer

1. What does the human skeletal system comprise?
2. What are bones made up of?
3. Which ribs are known as floating ribs? Why?
4. Name the bones which are present in upper arm and lower arm of human body.
5. Explain the function of the bone which is present at the back supports the ribs.
6. What is vertebra?
7. **Complete the following:**

Skull



Made up of \_\_\_\_\_ bones



\_\_\_\_\_ bones form skull and \_\_\_\_\_ bones form face

8. Where is the longest bone is present in human body? Name the bone.
9. Give difference between movable and immovable joints.
10. Name the freely movable joint and give example of it.
11. Name the least movable joint and give example of it.
12. Give functions of ribcage.
13. Give functions of skeletal system.
14. What is muscles? How many types of muscles? Name them.
15. What is joint? Give functions of cartilage.





# M.R. Citi Public School

## Chapter- The circulatory system

### Q1. Multiple choice question answers:

- Name the organ that oxygenate and make the blood pure  
(a) Heart (b) Lungs (c) Kidney (d) Stomach
- The average pulse rate of human body is:  
(a) 72 per hour (b) 72 per second (c) 72 per minute (d) 72 per day
- The blood, blood vessels, and heart are the main or parts of \_\_\_\_\_ system.  
(a) circulatory (b) Muscular (c) Skeletal (d) None of these
- \_\_\_\_\_ Carries oxygen and carbon dioxide.  
(a) heart (b) Blood (c) Water (d) All of these
- Which of these have thick muscular walls?  
(a) veins (b) Arteries (c) All of these

### Q2. Fill the blanks.

- Red blood cells are also known as \_\_\_\_\_.
- \_\_\_\_\_ Are deep seated.
- \_\_\_\_\_ is largest artery in human body.
- The blood has to pass twice through the heart, so as to circulate once in a body is called \_\_\_\_\_ circulation.
- The thinnest blood vessels are \_\_\_\_\_.

### Q3. State, true or false

- There are four types of blood vessels.
- Blood helps in removal of waste materials from the body.
- Veins are deep seated.
- White blood cells are also known as erythrocytes.
- Lungs help to pump blood to all parts of the body.

### Q4. Answer the following questions in one sentence.

- What is blood?
- Name the cells present in the blood.
- Where are the capillaries present?
- What is the name of largest artery in the human body?
- What is pulse?
- What is the pulse rate of an elephant?
- How many chambers of heart are present in human body?

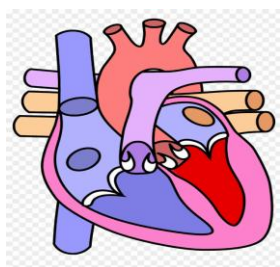




# M.R. Citi Public School

## Q5. Answer the following questions.

1. Name the three parts of the circulatory system.
2. How the arteries are different from veins?
3. Why arteries have thick walls while veins have thin walls?
4. What is double circulation?
5. Explain briefly the working of heart.
6. label the following structure of heart.



## Chapter- safety and first aid

### Q1. Fill in the blanks

1. An.....is an unexpected event that cause pain and damage
2. .... are the people who walk on road.
3. Cross the road at.....
4. Always walk on the.....
5. Touch the electric switch with..... hands.

### Q2. State true or false and correct statement also

1. Water is the bad conductor.
2. Rabies is caused by snake bite.
3. What is used to put out the fire caused by electric spark.
4. Use mobile phone while walking on the road.
5. Naphthalene balls should be kept in the reach of children

### Q3. Short question answers:

1. What is the item that should be kept out of the reach of the children?
2. What are the reasons of fire accidents?
3. What are the causes of road accidents?
4. What are inflammable objects. Give two examples.
5. What are steps you will follow in the case of dog bite?

### Q4. Long question answers:

1. What are the steps you will follow in the case of snake bite?
2. Write five safety rules that is followed by pedestrian.





# M.R. Citi Public School

3. What should be done in the keys a person swallows poison? 4. What are the rules followed for fire safety?

5. Draw the sign boards of the following:

(a) Stop

(b) turn right

(c) turn left

6. Identify the following road signs:



## SOCIAL STUDIES

### Ch – 1 (Map and Globe)

#### Q1. Fill in the blanks.

1. The busiest ocean is the \_\_\_\_\_.
2. The second largest continent is \_\_\_\_\_.
3. A \_\_\_\_\_ is the representation of the Earth on a flat surface.
4. A \_\_\_\_\_ is a model of the Earth.
5. \_\_\_\_\_ is the smallest continent.
6. The \_\_\_\_\_ Ocean is the only ocean named after a country.
7. High mountains are shown in \_\_\_\_\_ colour.
8. \_\_\_\_\_ map shows the political divisions of the world into continents, countries, states etc.

#### Q2. Write True and False. Write the correct statement.

1. The Pacific Ocean is the smallest and shallowest ocean. \_\_\_\_\_
2. It is difficult to carry globe. \_\_\_\_\_
3. The Caspian Sea separates Russia from Asia. \_\_\_\_\_
4. Green colour is used for oceans, lakes and rivers. \_\_\_\_\_
5. Europe is the second largest continent. \_\_\_\_\_

#### Q3. Questions and answers

1. What is map? Name three types of maps.
2. How do colors represent different landforms on a map?
3. Comparison between Map and Globe.
4. What is the difference between seas and oceans?
5. Name the deepest and the shallowest ocean in the world.
6. What do you mean by continents? Write down their names in chronological order.





# M.R. Citi Public School

7. What do you understand by the language of a map?
8. What do you mean by cardinal directions? Name the four directions and sub directions with the help of diagram.

directions with

## Q4. Assertion Reason

Assertion – A globe is a better way to understand the Earth's shape than a map.

Reason – S globe is round and three – dimensional, while a map is flat and two dimensional.

- a) Both A and R are true, and R is a correct explanation of A.
- b) A is true, but R is false.
- c) Both A and R are true, but R is not a correct explanation of.
- d) A is false, but R is true.

## L- 2 (Latitudes and Longitudes)

### Q1. Fill in the blanks.

1.  $0^{\circ}$  meridians are called \_\_\_\_\_.
2. The Earth is \_\_\_\_\_ in shape.
3.  $180^{\circ}$  E and  $180^{\circ}$  W are one and form the \_\_\_\_\_.
4. The degree of the Equator is \_\_\_\_\_.
5. Parallels of latitudes are \_\_\_\_\_ circle.
6. All \_\_\_\_\_ are of the same length.
7. The Royal Observatory at Greenwich is near \_\_\_\_\_.
8. There are \_\_\_\_\_ parallels of latitudes.

### Q2. Write True or False. Write correct statement also.

- 1) Total meridians are 389. \_\_\_\_\_
- 2) The prime meridian runs from North to South. \_\_\_\_\_
- 3) Poles are near the Equator. \_\_\_\_\_
- 4) The top point of the axis is called North pole. \_\_\_\_\_
- 5) All latitudes are of the same length. \_\_\_\_\_

### Q3. Questions and Answers

1. What is the Prime Meridian? Give its other names. Why is it called so?
2. What are latitudes? Write down the characteristics features of the parallels of latitudes.
3. How many Meridians of Longitudes are there? How it is different from Parallels of Latitudes?
4. What is an axis? What is its inclination?
5. What is grid?







# M.R. Citi Public School

6. What do you mean by IDL?

7. What is Equator?

8. Define

- |                        |                        |
|------------------------|------------------------|
| a) Northern Hemisphere | b) Southern Hemisphere |
| c) North Pole          | d) South Pole          |

## Ch – 6 (The Democratic Republic of the Congo)

### Q1 . Fill in the blanks.

1. The DRC lies in the \_\_\_\_\_ region.
2. The \_\_\_\_\_ river is the second longest river in Africa.
3. People living in the forest of the Congo Basin are called \_\_\_\_\_ .
4. \_\_\_\_\_ is the major seaport in DRC .
5. The climate of DRC is \_\_\_\_\_ and \_\_\_\_\_ throughout the year.
6. \_\_\_\_\_ is the capital of DRC .
7. The DRC is located on the basin of river \_\_\_\_\_ .
8. \_\_\_\_\_ is the language of the largest group of people

### Q2. Write True or False. Write down the correct statement.

1. It's rains heavily in Zaire in the morning. \_\_\_\_\_
2. The transport is well developed in DRC . \_\_\_\_\_
3. Farming is the main occupation of DRC . \_\_\_\_\_
4. Pygmies are the original inhabitants of DRC. \_\_\_\_\_
5. The DRC lies in the southern tropical region in Africa . \_\_\_\_\_

### Q3. Questions and Answers

1. Who are pygmies ?
2. What type of climate does the DRC and why ?
3. Write down the location of DRC and the neighbouring countries ?
4. Name the minerals found in DRC .
5. What do you mean by Highway of Central Africa ?
6. Name four important lakes of DRC.
7. Write short note on wildlife of DRC.
8. Name three trees of commercial use found in the DRC .

(Ms. Neeru Sharma)  
Coordinator  
M: 87250-24407

(Ms. Ritu Batra)  
Principal

